

# Train Timetable

## Challenge Cards

Train Timetable



1. Journey B takes 1 hour to get from London to Derby. What time do you arrive at Derby?



Train Timetable



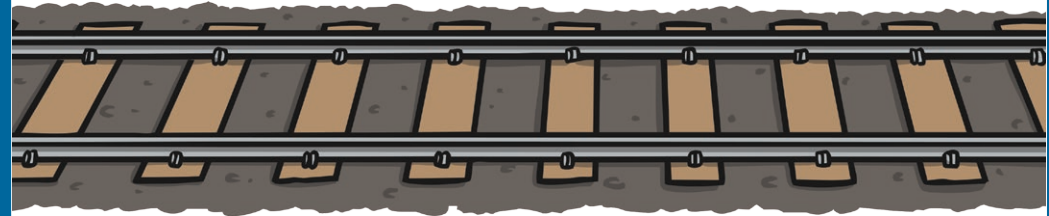
2. Journey C takes a total of 3 hours, what time does it arrive at Newcastle?



Train Timetable




3. How long does journey A take?



Train Timetable



4. You need to be at Hull for 13:30, which is the best train to catch?



Train Timetable




5. You arrive at Sheffield train station at 18:10. How long do you have to wait for the next train to Newcastle?



Train Timetable



6. How many stations does the 11:30 train stop at before it reaches Hull?



# Train Timetable

## Challenge Cards

Train Timetable



1. Journey B takes 1 hour 15 mins to get from London to Derby. What time do you arrive at Derby?



Train Timetable



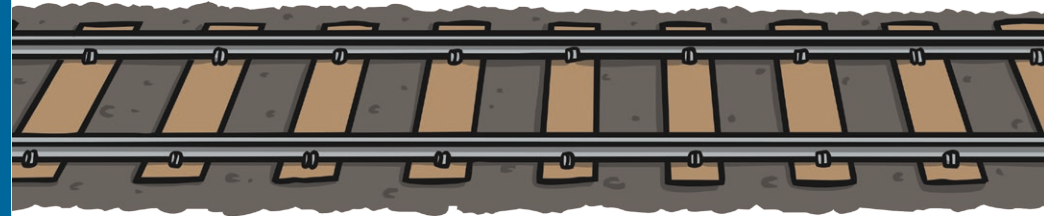
2. Journey C takes a total of 3 hours, what time does it arrive at Newcastle?



Train Timetable




3. How long do journeys A and B take?



Train Timetable



4. You need to be at Hull for 13:30, which is the best train to catch?



Train Timetable




5. You get to Sheffield at 16:50. How long do you have to wait for a train to Newcastle?



Train Timetable



6. How many stations does the 11:30 train stop at before it reaches Hull?



# Train Timetable

## Challenge Cards

Train Timetable



1. Journey B takes 1 hour and 16 mins to get from London to Derby. What time do you arrive at Derby?



Train Timetable



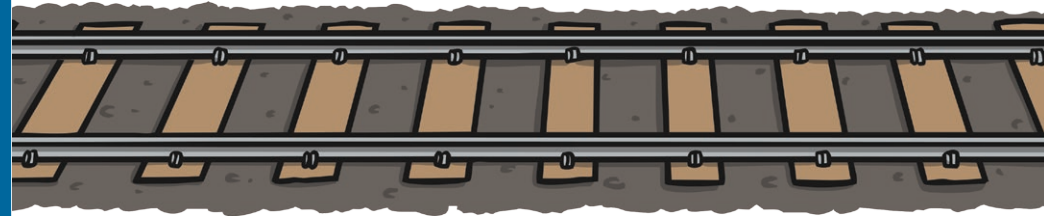
2. Journey C takes a total of 3 hours and 5 minutes, what time does it arrive at Newcastle?



Train Timetable




3. How long do journeys A and B take? What is the difference in time?



Train Timetable



4. You need to be at Hull for 15:30, which is the best train to catch? How long will you need to wait?



Train Timetable




5. You arrive at Sheffield train station at 16:50. How long do you have to wait for the next train to Newcastle?



Train Timetable



6. How many stations does the 11:37 train stop at before it reaches Hull?



# Train Timetable Answers

★	★★	★★★
<ol style="list-style-type: none"><li>1. 12:30</li><li>2. 19:40</li><li>3. 4 hours 5 minutes</li><li>4. Journey A</li><li>5. 20 minutes</li><li>6. 2 stations</li></ol>	<ol style="list-style-type: none"><li>1. 12:45</li><li>2. 19:40</li><li>3. Journey A = 3 hours 50 minutes, Journey B = 3 hours 5 minutes</li><li>4. Journey A</li><li>5. 1 hour 40 minutes</li><li>6. 2 stations</li></ol>	<ol style="list-style-type: none"><li>1. 12:53</li><li>2. 19:48</li><li>3. Journey A = 3 hours 49 minutes, Journey B = 2 hours 57 minutes, Difference = 52 minutes</li><li>4. Journey A or B. Journey A = 2 hours 14 minutes, Journey B = 1 hour 32 minutes</li><li>5. 1 hour 37 minutes</li><li>6. 2 stations</li></ol>



# Train Timetable



<b>Destination</b>	<b>Journey A</b>	<b>Journey B</b>	<b>Journey C</b>
<b>London</b>	10:20	11:30	16:40
<b>Derby</b>	12:20		18:00
<b>Sheffield</b>	12:40	13:10	18:30
<b>Hull</b>	13:20	13:55	19:15
<b>Newcastle</b>	14:25	14:40	
<b>Duration</b>			3 hours



# Train Timetable



Destination	Journey A	Journey B	Journey C
London	10:15	11:30	16:40
Derby	12:15		18:05
Sheffield	12:40	13:10	18:30
Hull	13:20	13:55	19:15
Newcastle	14:05	14:35	
Duration			3 hours

# Train Timetable



Destination	Journey A	Journey B	Journey C
London	10:17	11:37	16:43
Derby	12:12		18:08
Sheffield	12:38	13:08	18:27
Hull	13:16	13:58	19:14
Newcastle	14:06	14:34	
Duration			3 hours 5 minutes